


Practice Drill:

Note values

For each of the following notes, draw the correct number of requested note values in the space provided.


1. eighth notes:



2. quarter notes:



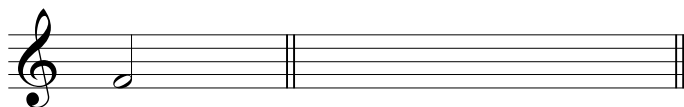
3. sixteenth notes:



4. sixteenth notes:




5. eighth notes:




6. sixteenth notes:




7. eighth notes:



8. quarter notes:



9. sixteenth notes:



10. eighth notes:

